



UNEB BLUE PRINT 2023

INTEGRATED SCIENCE (SET FIVE)

Time allowed: 2 Hours 15 Minutes

Index no:

Random No					Personal No		

Candidate's name:

Candidate's signature:

School:

District :

Read the following instructions carefully

1. This paper is made up of two sections: **A** and **B**.
2. Section **A** has **40** questions (**40 marks**).
3. Section **B** has **16** questions (**60 marks**).
4. Answer ALL questions in both sections **A** and **B**.
5. All answers **MUST** be written in the space provided
In blue or black ball point pens or ink. All diagrams
Should be in pencil.
6. Unnecessary crossing of answers will lead to loss of
Marks.
7. Poor hand writing which cannot be easily read,
May lead to loss of marks.

FOR EXAMINERS' USE ONLY		
Qn. No	MARKS	SIGN
1 – 10		
11– 20		
21 – 30		
31– 40		
44 – 46		
47 – 48		
49 - 51		
52 - 53		
54 - 55		
TOTAL		

SECTION A: 40 MARKS

1. Name any one animal that provided labour to people.

2. How does a mushroom obtain its food?

3. Write any one disadvantage of washing vehicles near water bodies.

4. Mention any one mixture that can be separate using a magnet.

5. Give a reason for which fresh fruits should be included in one's diet.

6. In which way is the feeding of an eagle similar to that of a lion?

7. How do wetlands increase the spread of malaria in an area?

The diagram below shows a safety equipment. Use it to answer questions 8 and 9.



8. Which component of air is used in the above equipment?

9. Why is the above equipment painted with bright and clear colours?

10. State any one sign of heat period in a cow.

11. Give any one characteristic which makes sand soil suitable for building.


12. What is the importance of regular spreading of beddings in sunshine?

13. Write any one structural difference between a snail and a slug.

14. Which element of Primary Health Care (PHC) is promoted by draining stagnant water from the compound?

15. What First Aid can you give to a person with an insect in his / her ear?

The diagram below shows a wooden structure put in a deep litter house of poultry. Use it to answer questions 16 and 17



16. Identify the wooden structure shown above.

17. How important is the above structure to poultry?

18. Why are calves disbudded?

19. In which way does rotation grazing help to control tick born diseases in livestock?

20. Give any one factor which affects the rate of evaporation.

21. Write any one health habit which promotes proper working of the human lungs.

22. Why do electricians wear rubber gloves when carrying out repairs?

23. Name the type of immunity passed on from mother to a baby through the placenta and breast milk.

24. State any one adaptation of carnivorous mammals to their mode of feeding.

25. Give a reason for which a person infected with HIV/AIDS becomes more vulnerable to other diseases.

26. Write one secondary sex characteristic which occurs in both male and female adolescents.

27. State any one way of controlling insect borne diseases in a home.

28. In which way does the use of solar cooker help to conserve trees in an area?

29. Apart from floods, mention any one other natural hazard that may displace people.

30. Write any one disadvantage of free range system in rearing of goats.

31. Why is heat transfer by conduction not possible in liquids and gases?

32. How are echoes important to a bat during flight?

The diagram below shows a method of seed dispersal. Use it to answer questions 33 and 34.



33. Identify the method of seed dispersal shown.

34. Name any one plant whose seeds are dispersed as shown.

35. Give any one characteristic common to all arthropods.

36. What is the importance of planting short grass as a method of controlling soil erosion in a school compound?

37. Why are muscles of a human heart regarded as involuntary muscles?

38. Mention one activity done by crop farmers during windy weather.

39. How is the spread of sleeping sickness different from that of malaria?

40. Give one characteristic of flowers pollinated by wind.

SECTION B

41. a) Name one breed of rabbits kept in Uganda.

b) List any two diseases which attack rabbits.

i) _____ ii) _____

c) Write one advantage of keeping rabbits over goats and sheep.

The diagram below shows a casualty who has just fainted. Study the diagram carefully and answer the questions that follow.



42. (a) What scientific term describes the person marked F?

(b) What is the main cause of such accident?

(c) Why are the legs of the casualty raised slightly higher than the head?

(d) What is the importance of fanning the casualty as shown above?

43. In the table below, list A shows examples of tools and list b shows class of simple machines they belong to in their wrong order.

List A. Example of a tool	List B. Class of simple machine
A pair of scissors	Screws
A leaning ladder	First class levers
An egg beater	Inclined planes
Nuts and bolts	Wheels and axles

Select from the table the correct class of simple machine of a tool and write in the space provided below.

a) A pair of scissors:

b) A leaning ladder:

c) An egg beater: _____

d) Nuts and bolts: _____

44. (a) State the function of each of the following parts of a VIP latrine

(i) Screen: _____

(ii) Vent pipe: _____

(b) Give any two ways of promoting cleanliness in an ordinary pit latrine.

i) _____

ii) _____

45. (a) Where in the human digestive tract does the digestion of each of the following begin?

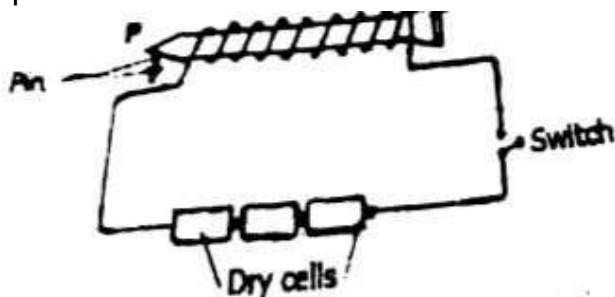
i) Proteins: _____

ii) Fats and oils: _____

(b) Apart from killing germs, write one other role of hydrochloric acid during digestion of food.

(C) State any one way the ileum is adapted to its function.

46. The diagram below shows a method of making magnets. Use it to answer the questions that follow.



(a) Identify the method of making magnets shown in the diagram.

(b) Identify the magnetic pole of the soft iron marked P.

(c) What will happen to the pin on the soft iron when the switch is open?

(d) Use an arrow to show the direction of current flow on the conducting wire.

47. **The table below shows diseases, vectors, germs which they carry and the diseases caused. Study and complete it correctly.**

Disease vector	Germ carried	Disease caused
_____	Schistosomes	Bilharziasis
Simulium flies	Onchcerca volvulus	_____
Female anopheles mosquito	_____	Malaria
_____	Vibro cholera bacterium	cholera

48. (a) Mention any two methods of applying fertilizers in a garden.

i) _____

ii) _____

(b) List ay two disadvantages of using artificial or inorganic fertilisers in crop growing.

(i) _____

(ii) _____

49. (a) Name the process by which plants lose water as vapour to the atmosphere through the stomata.

(b) In which way do plants benefit from the above process?

(c) How is the above process useful to the environment?

(d) How does pruning of a plant help to reduce the rate of water loss?

50. (a) Mention any one example of a fungus.

(b) State any one way in which fungi are different from plants.

(c) Write two ways through which people make use of yeast.

(i) _____

(ii) _____

51. (a) List any two negative effects of drug abuse to human health.

(i) _____

(ii) _____

(b) Write any two ways of controlling drug poisoning in a family.

(i) _____

(ii) _____

52. (a) Name the two types of female bees in a bee hive.

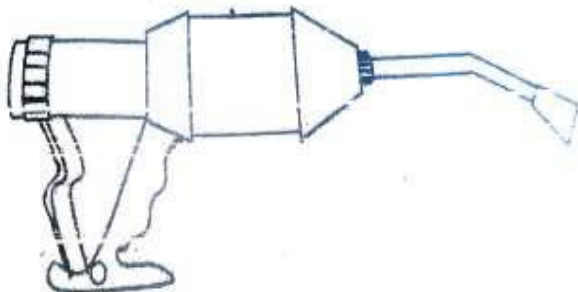
(i) _____

(ii) _____

(b) Apart from making honey, give any one other duty of worker bees in a bee hive.

(c) State any one advantage of using modern bee hives in bee keeping.

53. **The diagram below shows a tool used in cattle management. Use it to answer the questions that follow.**



(a) Name the tool shown in the diagram.

_____ (b)

Which activity on cattle farm is carried out using the above tool?

(c) Mention two other routine activities carried out on cattle farm besides the one in (b) above.

i) _____

ii) _____

54. (a) Name one process in plants which uses;

(i) Carbon dioxide gas: _____

(ii) Nitrogen gas: _____

(b) Give any one natural process which lowers the percentage of oxygen in the atmosphere.

(c) Give any one way of controlling the dangers of air pollution.

55. (a) List any two diseases in humans which result from poor oral hygiene.

i) _____

ii) _____

(b) State any one reason for brushing one's teeth regularly.

(c) In which way does regular brushing of teeth help to control tooth decay?

***** **END** *****